



**INDIAN SCHOOL AL WADI AL KABIR  
CLASS – I (2024-2025)  
DEPARTMENT OF MATHEMATICS**

**NUMBERS UP TO 20 (WORKBOOK PAGES 1,2,6,7 and 109)**

**RESOURCE PERSON: MS ANITA AGUIAR**

**NAME:** \_\_\_\_\_

**SEC:** \_\_\_\_\_

**DATE:** \_\_\_\_\_

**GET STARTED**

**Number in real life**

**Look at the picture.**



Page 1




- 1 How many students are there in the picture? \_\_\_\_\_.
- 2 How many dustbins? \_\_\_\_\_.
- 3 How many posters? \_\_\_\_\_.
4. How many boys? \_\_\_\_\_.
5. How many girls? \_\_\_\_\_.
6. How many blackboards? \_\_\_\_\_.
7. How many pieces of chalk? \_\_\_\_\_.

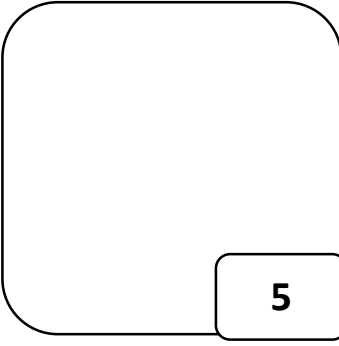
**Check what you know**

**Draw the correct number of marbles.**


Page 2



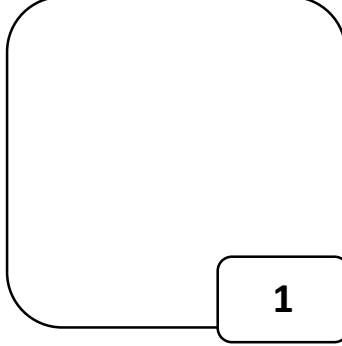
**3**



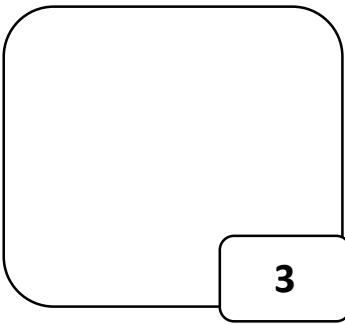
**5**



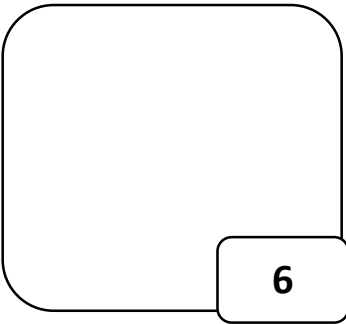
**4**



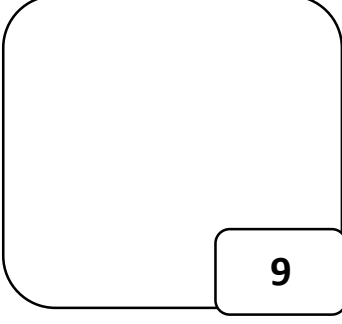
**1**



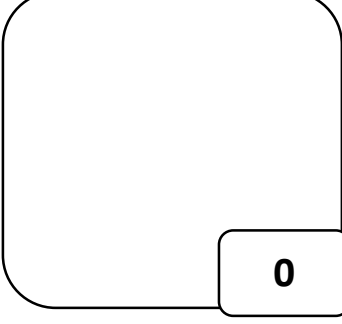
**3**



**6**
















**9**



**0**

**EXERCISE 1 Count the fingers. Write the numeral and number name.**

a)		<input type="text"/>	_____
b)		<input type="text"/>	_____
c)		<input type="text"/>	_____
d)		<input type="text"/>	_____
e)		<input type="text"/>	_____
f)		<input type="text"/>	_____
g)		<input type="text"/>	_____
h)		<input type="text"/>	_____
i)		<input type="text"/>	_____
j)		<input type="text"/>	_____
k)		<input type="text"/>	_____
l)		<input type="text"/>	_____
m)		<input type="text"/>	_____

**1. Write the missing numbers.**

1									
									20